

VIDYA BHAWAN BALIKA VIDYA PITH

CLASS- 2

DATE – 09. 08.21

SUB – MATHS





S.T -PRAGYA

BASED ON N.C.E.R.T PATTERN

CH – GEOMETRICAL Shapes and
Patterns .

Identify the shapes and tick the correct answer
According to SOLID SHAPES.

1. Tick (✓) the correct answer.

a		<input type="checkbox"/> Cube <input type="checkbox"/> Sphere	b		<input type="checkbox"/> Cone <input type="checkbox"/> Cuboid
c		<input type="checkbox"/> Cube <input type="checkbox"/> Cuboid	d		<input type="checkbox"/> Oval <input type="checkbox"/> Sphere

2. Name two objects which resemble each of these shapes.

a cuboid	i _____	ii _____
b cube	i _____	ii _____
c cylinder	i _____	ii _____
d sphere	i _____	ii _____
e cone	i _____	ii _____

136

